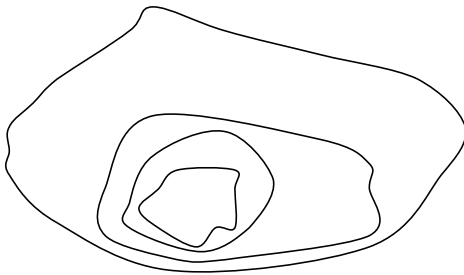


# READING A TOPOGRAPHIC MAP - B\*

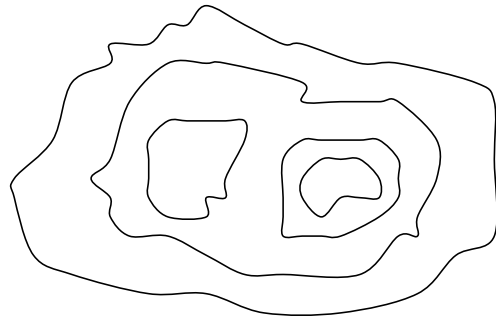
**PART 1** Match each image below with the appropriate word description.

1. \_\_\_\_\_ Gentle slope on all sides.
2. \_\_\_\_\_ Round hill with two peaks.
3. \_\_\_\_\_ Steep south side.
4. \_\_\_\_\_ Two peaks, with east side higher.

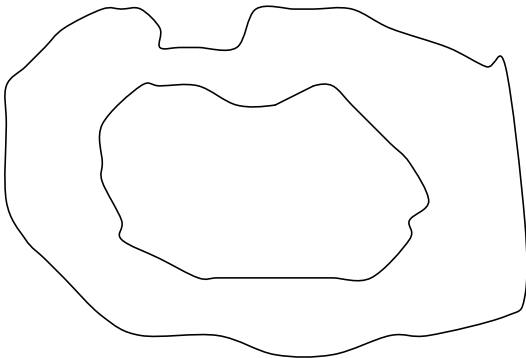
A.



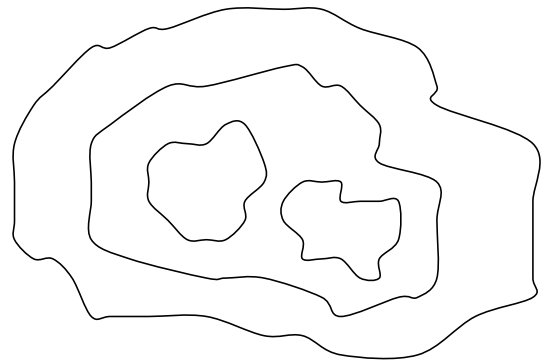
B.



C.



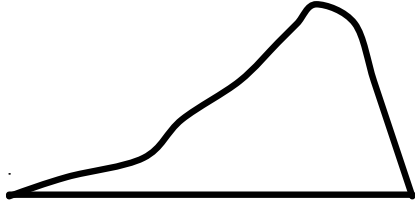
D.




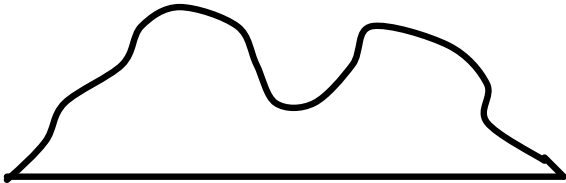
\* adapted from *The Language of Maps* - 1983 by Pitman Learning Inc.


# READING A TOPOGRAPHIC MAP - B\*

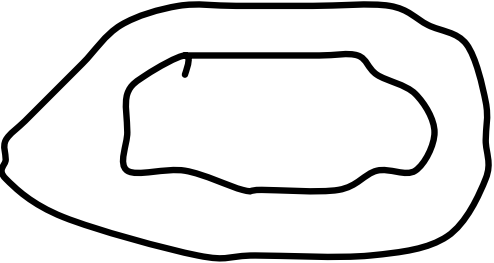
PART 2. Match each side view image with the appropriate set of contour lines.

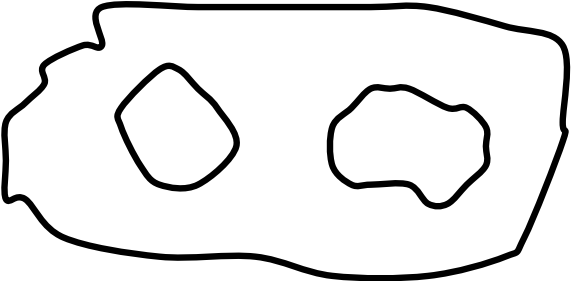
1. \_\_\_\_\_ 

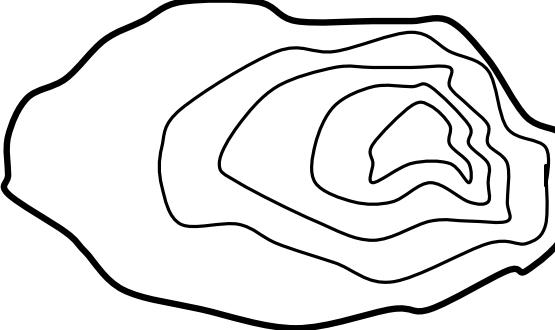
2. \_\_\_\_\_ 

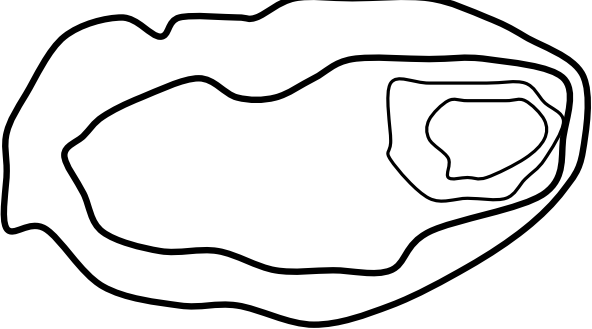
3. \_\_\_\_\_ 

4. \_\_\_\_\_ 

A. 

B. 

C. 

D. 

\* adapted from *The Language of Maps*, 1983 by Pitman Learning Inc.